

Pressure -Temperature Relationship in Gases

Gases are made up of molecules that are in constant motion and exert pressure when they collide with the walls of their container. The velocity and the number of collisions of these molecules is affected when the temperature of the gas increases or decreases. In this experiment, you will study the relationship between the temperature of a gas sample and the pressure it exerts. Using the apparatus shown in Figure 1, you will place an Erlenmeyer flask containing an air sample in water baths of varying temperature. Pressure will be monitored with a Gas Pressure Sensor and temperature will be monitored using a Temperature Probe. The volume of the gas sample and the number of molecules it contains will be kept constant. Pressure and temperature data pairs will be collected during the experiment and then analyzed. From the data and graph, you will determine what kind of mathematical relationship exists between the pressure and absolute temperature of a confined gas. You may also do the extension exercise and use your data to find a value for absolute zero on the Celsius temperature scale.

OBJECTIVES (You will need this information to write a purpose.)

In this experiment, you will

- Study the relationship between the temperature of a gas sample and the pressure it exerts.
- Determine from the data and graph, the mathematical relationship between the pressure and absolute temperature of a confined gas.
- Find a value for absolute zero on the Celsius temperature scale.

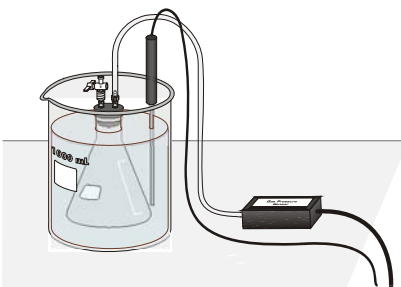


Figure 1

MATERIALS (THIS INFORMATION IS NOT NEEDED IN THE LAB NOTEBOOK BUT MIGHT BE IMPORTANT IN UNDERSTANDING THE PROCEDURE.)

computer
Vernier computer interface
Logger *Pro*
Vernier Gas Pressure Sensor
Vernier Temperature Probe
plastic tubing with two connectors
rubber stopper assembly

125 mL Erlenmeyer flask
ring stand
utility clamp
hot plate
four 1 liter beakers
glove or cloth
ice

PROCEDURE (SUMMARIZE THIS INFORMATION INTO A PARAGRAPH IN YOUR LAB NOTEBOOK.)

1. Obtain and wear goggles.
2. Prepare a boiling-water bath. Put about 800 mL of hot tap water into a 1 L beaker and place it on a hot plate. Turn the hot plate to a high setting.
3. Prepare an ice-water bath. Put about 700 mL of cold tap water into a second 1 L beaker and add ice.
4. Put about 800 mL of room-temperature water into a third 1 L beaker.
5. Put about 800 mL of hot tap water into a fourth 1 L beaker.
6. Prepare the Temperature Probe and Gas Pressure Sensor for data collection.
 - a. Plug the Gas Pressure Sensor into CH1 and the Temperature Probe into CH2 of the computer interface.
 - b. Obtain a rubber-stopper assembly with a piece of heavy-wall plastic tubing connected to one of its two valves. Attach the connector at the free end of the plastic tubing to the open stem of the Gas Pressure Sensor with a clockwise turn. Leave its two-way valve on the rubber stopper open (lined up with the valve stem as shown in Figure 2) until Step 9.
 - c. Insert the rubber-stopper assembly into a 125 mL Erlenmeyer flask. **Important:** Twist the stopper into the neck of the flask to ensure a tight fit.
 - d. Close the 2-way valve above the rubber stopper—do this by turning the valve handle so it is perpendicular with the valve stem itself (as shown in Figure 3). The air sample to be studied is now confined in the flask.

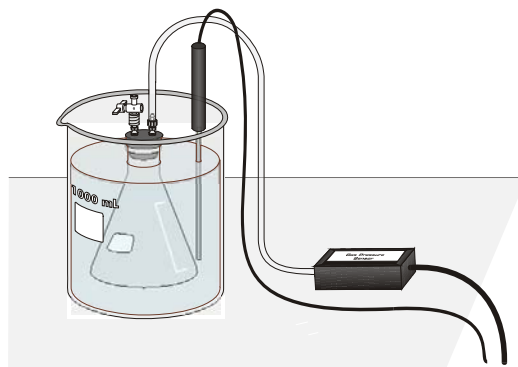
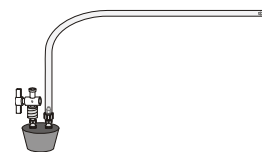



Figure 3

7. Prepare the computer for data collection by opening the file “07 Pressure-Temperature” from the *Chemistry with Computers* folder of *LoggerPro*.
8. Click to begin data collection.
9. Collect pressure vs. temperature data for your gas sample:

- a. Place the flask into the ice-water bath. Make sure the entire flask is covered (see Figure 4). Stir.
 - b. Place the temperature probe into the ice-water bath.
 - c. When the pressure and temperature readings displayed in the meter stabilize, click . You have now saved the first pressure-temperature data pair.
10. Repeat the Step-9 procedure using the room-temperature bath.
 11. Repeat the Step-9 procedure using the hot-water bath.
 12. Use a ring stand and utility clamp to suspend the temperature probe in the boiling-water bath. To keep from burning your hand, hold the tubing of the flask using a glove or a cloth. After the temperature probe has been in the boiling water for a few seconds, place the flask into the boiling-water bath and repeat the Step-9 procedure. Remove the flask and the temperature probe after you have clicked . **CAUTION:** *Do not burn yourself or the probe wires with the hot plate.*
 13. Click when you have finished collecting data. Turn off the hot plate. Record the pressure and temperature values in your data table, or, if directed by your instructor, print a copy of the table.
 14. Examine your graph of pressure vs. temperature ($^{\circ}\text{C}$). In order to determine if the relationship between pressure and temperature is direct or inverse, you must use an absolute temperature scale; that is, a temperature scale whose 0° point corresponds to absolute zero. We will use the Kelvin absolute temperature scale. Instead of manually adding 273 to each of the Celsius temperatures to obtain Kelvin values, you can create a new data column for Kelvin temperature.
 - a. Choose New Calculated Column from the Data menu.
 - b. Enter "Temp Kelvin" as the Name, "T Kelvin" as the Short Name, and "K" as the Unit. Enter the correct formula for the column into the Equation edit box. Type in "273+". Then select "Temperature" from the Variables list. In the Equation edit box, you should now see displayed: 273+"Temperature". Click .
 - c. Click on the horizontal axis label and select "Temp Kelvin" to be displayed on the horizontal axis.
 15. Decide if your graph of pressure vs. temperature (K) represents a direct or inverse relationship:
 - a. Click the Curve Fit button, .
 - b. Choose your mathematical relationship from the list at the lower left. If you think the relationship is linear (or direct), use Linear. If you think the relationship represents a power, use Power. Click .
 - c. A best-fit curve will be displayed on the graph. If you made the correct choice, the curve should match up well with the points. If the curve does not match up well, try a different mathematical function and click again. When the curve has a good fit with the data points, then click .
 - d. Autoscale both axes from zero by double-clicking in the center of the graph to view Graph Options. Click the Axis Options tab, and select Autoscale from 0 for both axes.
 16. Save a copy of the graph of pressure vs. temperature (K) in your server folder. Make sure your name is in the file name. The regression line should still be displayed on the graph. Also, save a copy of the graph in your teacher's class "drop-box".

DATA AND CALCULATIONS (SET THIS UP IN YOUR LAB NOTEBOOK.)

Pressure (kPa)	Temperature (°C)	Temperature (K)	Constant, k (P/T or $P \cdot T$)
-------------------	---------------------	--------------------	---